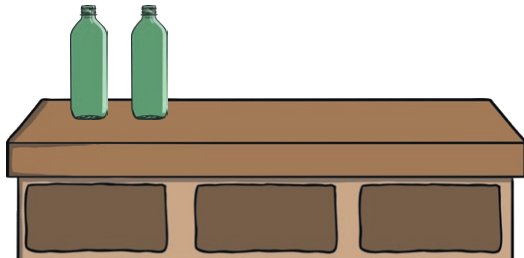



# Ten Green Bottles Number Bonds to 10

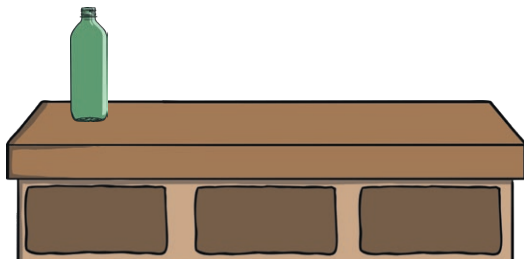
Some green bottles have fallen off the wall. There should be 10 altogether. Can you draw the bottles that have fallen off the wall and complete the number sentences?




$$2 + \boxed{\phantom{00}} = 10$$




$$5 + \boxed{\phantom{00}} = 10$$




$$1 + \boxed{\phantom{00}} = 10$$



$$10 + \boxed{\phantom{00}} = 10$$



$$7 + \boxed{\phantom{00}} = 10$$

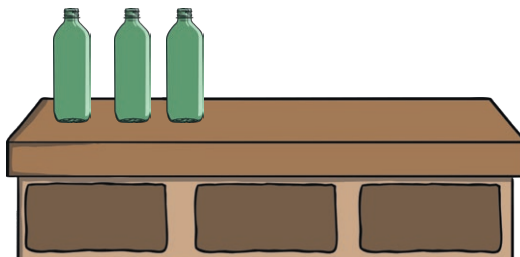


$$9 + \boxed{\phantom{00}} = 10$$


## Ten Green Bottles Number Bonds to 10




$$0 + \boxed{\phantom{00}} = 10$$




$$3 + \boxed{\phantom{00}} = 10$$



$$8 + \boxed{\phantom{00}} = 10$$



$$4 + \boxed{\phantom{00}} = 10$$



$$6 + \boxed{\phantom{00}} = 10$$